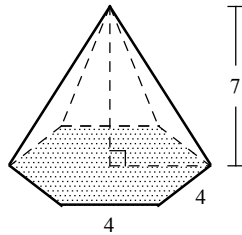


## Exercises - Pyramids and Cones

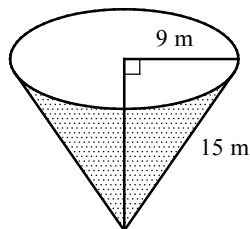
1



The figure above shows a pyramid with regular hexagonal base. The length of each side of the hexagonal face is 4 units and the height of the pyramid is 7 units. What is the volume of the pyramid?

- A)  $35\sqrt{3}$
- B)  $56\sqrt{3}$
- C)  $84\sqrt{3}$
- D)  $168\sqrt{3}$

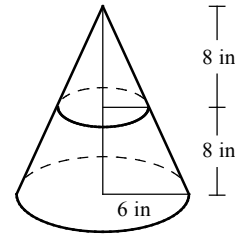
2



Water is pouring into a conical reservoir at the rate of  $2.4 \text{ m}^3$  per minute. If the radius of the base of the conical reservoir is 9 meters (m) and the length of the lateral edge is 15 m, to the nearest minute, how long will it take to fill up the empty reservoir?

- A) 212
- B) 318
- C) 424
- D) 530

3



A plane parallel to the base of a cone divides the cone into two pieces, and removes the top part. The radius of the cone is 6 inches (in), the height of the cone is 16 in, and the distance from the base to the parallel plane is 8 in. What is the volume of the remaining bottom part, in cubic inches?

- A)  $56\pi$
- B)  $84\pi$
- C)  $126\pi$
- D)  $168\pi$

4

If the circumference of the base part of cone is 10 centimeters (cm) and the height of the cone is 8 cm, what is the volume of the cone, to the nearest cubic centimeter?

- A) 18
- B) 21
- C) 24
- D) 32